



# FINDING THE RULE FOR AN ARITHMETIC SEQUENCE


<b>Sequence</b>
0, 3, 6, 9, 12, 15, ...
<b>Rule</b>



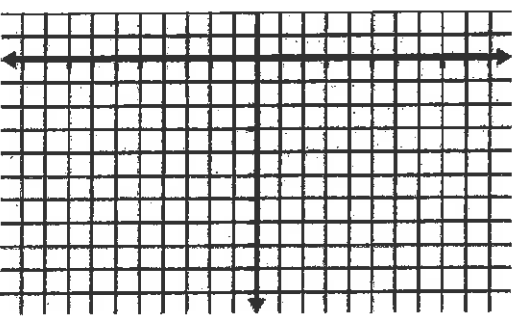
<b>Sequence</b>
4, 2, 0, -2, -4, -6, ...
<b>Rule</b>



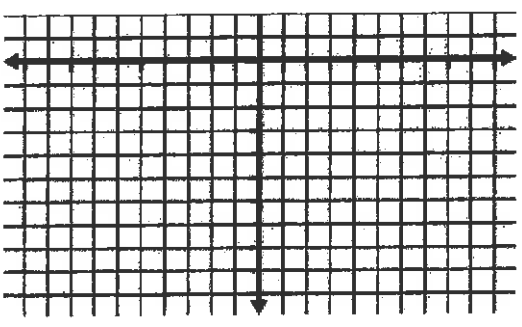
<b>Sequence</b>
-5, -1, 3, 7, 11, ...
<b>Rule</b>



<b>Sequence</b>
8, 5, 2, -1, -4, ...
<b>Rule</b>



<b>Sequence</b>
6, 5, 4, 3, 2, 1, ...
<b>Rule</b>



<b>Sequence</b>
-7, -5, -3, -1, 1, ...
<b>Rule</b>

